

Name _____



Practice Numbers 1 – 50

Practice writing your numbers 1-50 by tracing the numbers below.

1	2	3	4	5
6	7	8	9	10
11	12	13	14	15
16	17	18	19	20
21	22	23	24	25
26	27	28	29	30
31	32	33	34	35
36	37	38	39	40
41	42	43	44	45
46	47	48	49	50

Name _____



Practice Numbers 51-100

Practice writing your numbers 51-100 by tracing the numbers below.

51	52	53	54	55
56	57	58	59	60
61	62	63	64	65
66	67	68	69	70
71	72	73	74	75
76	77	78	79	80
81	82	83	84	85
86	87	88	89	90
91	92	93	94	95
96	97	98	99	100

Name: _____



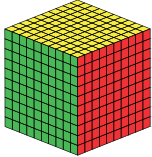
Counting 1 to 100

Fill in the missing numbers.

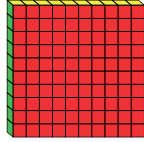
1	2	3	4		6	7	8	9	10
11	12	13	14	15	16	17		19	20
21		23	24	25		27	28	29	30
31	32	33		35	36	37	38	39	40
41	42	43	44		46	47	48		50
51		53	54	55	56	57	58	59	
61	62	63	64		66		68	69	70
	72	73		75	76	77	78		80
81	82		84	85		87		89	90
	92	93	94	95	96		98	99	

Place Value Blocks

Write the correct numerals
for the given place value blocks



Thousands



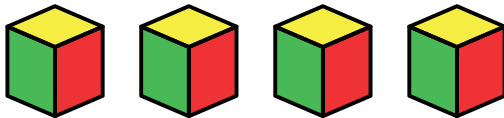
Hundreds

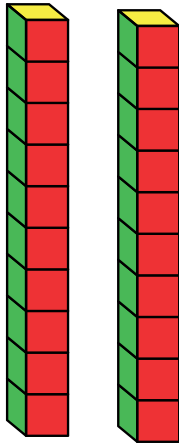


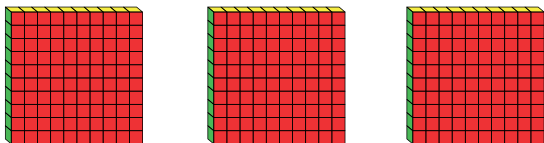
Tens

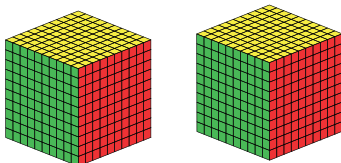


Ones









Name: _____

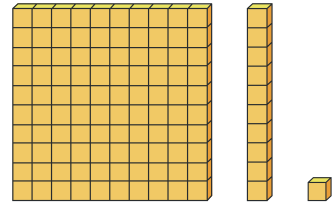
Grade: _____

Date: _____

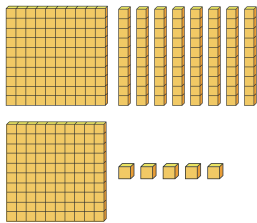


Place Value in Hundreds

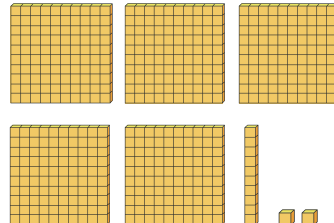
Build each number using your hundreds blocks and then write down how many hundreds, tens, and ones blocks you had for each place value.



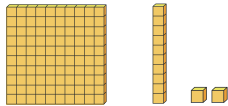
1




2



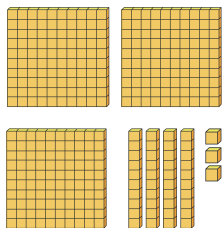
3




4



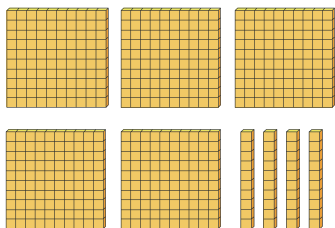
5



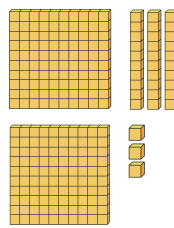
6



7



8





Place value blocks

Draw the place value blocks for the given numbers

254

1234

546

2000

500